

2.1-6 Separate variables and use partial fractions to solve the initial value problem

$$\frac{dx}{dt} = 3x(x-5), \quad x(0) = 2.$$

$$\bullet \frac{x'}{x(x-5)} = 3$$

$$\bullet \frac{Ax'}{x} + \frac{Bx'}{x-5} = 3$$

$$\bullet A \ln|x| + B \ln|x-5| = 3t + C$$

$$\bullet A \ln 2 + B \ln 3 = C$$

$$\bullet A \ln \frac{|x|}{2} + B \ln \frac{|x-5|}{3} = 3t$$

$$\bullet A = -1/5, B = 1/5 \text{ in relation}$$

$$\frac{1}{x(x-5)} = \frac{A}{x} + \frac{B}{x-5}$$

$$\bullet -\ln \frac{|x|}{2} + \ln \frac{|x-5|}{3} = 15t$$

$$\bullet \ln \frac{2}{|x|} \frac{|x-5|}{3} = 15t$$

$$\bullet \frac{2}{3} \frac{5-x}{x} = e^{15t}$$

$$\bullet x = \frac{5}{1 + \frac{3}{2} e^{15t}}$$

• separated form

• partial fractions applied. constants A, B found later.

• Method of quadrature

• Evaluate when $t=0$, $x=2$ to find C.

• Collect terms, using $\ln u - \ln v = \ln \frac{u}{v}$

• Heaviside's covering method applied

• Let $A = -1/5$, $B = 1/5$ and multiply by 5

• use log rule $\ln u - \ln v = \ln \frac{u}{v}$

• Take logs, drop absolute values near $x=2$.

• solve for x.

2.1-16

A rabbit population satisfies $P' = aP - bP^2$, $P(0) = P_0$.
Given $P_0 = 120$, $aP_0 = 8$ births per month, $bP_0^2 = 6$ deaths per month, Then find The number T of months when $P(T)$ is 95% of the limiting population $M = a/b$.

The given constants are $P_0 = 120$, $a = 1/15$,
 $b = 6/120^2$, $M = 160$. Then p 80 gives

$$P(T) = \frac{MP_0}{P_0 + (M - P_0)e^{-aT}}$$

and $P(T) = \frac{95}{100}M$ implies the exponential relation.

$$\frac{95}{100}M = \frac{P_0 M}{P_0 + (M - P_0)e^{-aT}}$$

cancel M , clear fractions, rearrange terms to get

$$\begin{aligned} e^{-aT} &= \frac{5}{95} \frac{P_0}{M - P_0} \\ &= \frac{5}{95} \cdot \frac{120}{40} \\ &= \frac{15}{95} \end{aligned}$$

Taking logs gives

$$T = 15 \ln\left(\frac{95}{15}\right)$$

2.1-17

$$T = \frac{80}{3} \ln\left(\frac{21}{4}\right) \approx 44.22$$

#38
P88

Ref: Edward - Penney section 2.1

Let $P_0 = 76.212$, $P_1 = 123.203$, $P_2 = 179.323$, be the U.S. populations for 1900, 1930, 1960, respectively. Assume the logistic model

$$P' = aP - bP^2,$$

with $M = b/a$, having solution

$$(1) \quad P(t) = \frac{MP_0}{P_0 + (M - P_0)e^{-at}}$$

Fit parameters a, b and then compare $P(80), P(90), P(100)$ to US Census data.

$$e^{-at} = \frac{M - P}{M - P_0} \cdot \frac{P_0}{P}$$

$$e^{-30a} = \frac{M - P_1}{M - P_0} \cdot \frac{P_0}{P_1}$$

$$e^{-60a} = \frac{M - P_2}{M - P_0} \cdot \frac{P_0}{P_2}$$

$$u = e^{-30a}$$
$$u^2 = e^{-60a}$$

$$\frac{M - P_2}{M - P_0} \cdot \frac{P_0}{P_2} = \left(\frac{M - P_1}{M - P_0} \cdot \frac{P_0}{P_1} \right)^2$$

$$M = 0,338.03$$

$$u = 0.508$$

$$a = -\frac{1}{30} \ln u$$
$$= 0.02260445191$$

$$b = Ma$$
$$= 7.640914331$$

• solve the equation (1) for the exponential term

• substitute $t = 30$

• substitute $t = 60$

• Define u , we'll find u and then $-30a = \ln u$

• substitute to find an equation for M .

• solved in Maple

• used $\ln u = \ln e^{-30a} = -30a$

21-38
cont

$$P(t) = \frac{(338.03)(76.212)}{76.212 + (338.03 - 76.212)e^{-at}}$$
$$= \frac{25761.7}{76.212 + 261.815 e^{-at}}$$

$$P(80) =$$

$$P(90) =$$

$$P(100) =$$

p 96
#4
#10

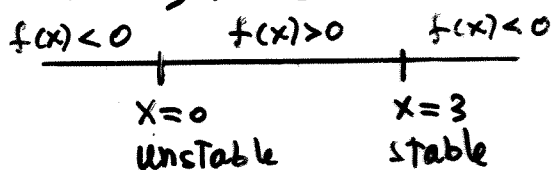
Find The critical points, classify as stable or unstable and construct The phase diagram. Sketch Typical curves. Finally, solve The DE explicitly.

2.2-4, p 93. $\frac{dx}{dt} = 3x - x^2$

$$f(x) = 3x - x^2$$

$$0 = x(3-x)$$

$$x=0, x=3$$



$$x(t) = \frac{3x_0}{x_0 + (3-x_0)e^{-3t}}$$

Funnel along $x=3$
Spout along $x=0$

RHS of The DE.

Find critical points.

phase diagram (see page 90)

See p 91, eqn (10)

see figure 2.2.4, p 90

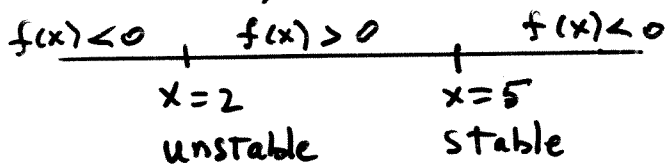
2.2-10, p 93. $\frac{dx}{dt} = 7x - x^2 - 10$ (Harvesting)

$$f(x) = 7x - x^2 - 10$$

$$0 = 7x - x^2 - 10$$

$$0 = -(x-5)(x-2)$$

$$x=2, x=5$$



Funnel along $x=5$
Spout along $x=2$

RHS of The DE

critical points found

phase diagram

see figure 2.2.8, p 92


Sketches duplicate The figures on p 90 and p 92.
submitted solutions should contain copies of these figures.

Escape Velocity of The Earth

Physics Background

Newton's Universal
Law of Gravitation

$$\text{Force} = \frac{m_1 m_2 G}{r^2}$$



Acceleration g due
to gravity

$$g = \frac{G m_2}{R^2}$$

m_2 = Mass of The earth

R = Mean radius of The earth

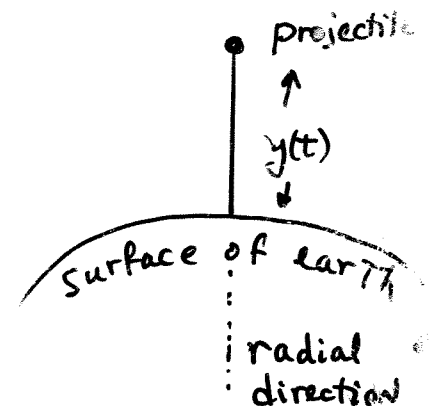
G = Universal Gravitation Constant

Differential Equation Theory

- Ignore air resistance
- Let $y(t)$ = projectile-to-surface distance at time t .
- Let m_1 = mass of projectile, m_2 = mass of The earth.

$$\text{DE: } m_1 y'' = - \frac{G m_1 m_2}{(R + y)^2}$$

$$\text{IC: } y(0) = 0, y'(0) = v_0$$



R = mean radius of
The earth

Escape velocity of the Earth

Assumptions

- Velocity v_0 causes the projectile to exit the field of the earth and never return.
- v_0 is minimal.

Math formulation

- $\lim_{t \rightarrow \infty} y(t) = \infty$
- $v_0 = \text{minimum over all possible } v_0$

Derivation of $v_0 = \sqrt{2gR}$

$$y'' y' = -\frac{Gm_2}{R^2} \frac{R^2 y'}{(R+y(t))^2}$$

$$\frac{1}{2} [(y')^2]' = -gR^2 \frac{y'}{(R+y)^2}$$

$$\frac{1}{2} (y')^2 = -gR^2 \left(\frac{-1}{R+y} \right) + C$$

$$\frac{1}{2} v_0^2 = gR + C$$

$$0 \leq C$$

$$0 \leq v_0^2 - 2gR$$

$$v_0 = \sqrt{2gR}$$

mult DE by y'
and cancel m_1

Simplify constants.
write LHS as derivative

method of quadrature
applied.

Use $y=0, y'=v_0$
 $t=0$. Found C .

Use $(y')^2 \geq 0$ and
 $\lim_{t \rightarrow \infty} y(t) = \infty$.

substitute for C .

Minimum v_0 found.

P106
#9

Ref: Edwards-Penney section 2.3

Motorboat problem

The equation has the form $v' + pv = q$, which is linear. Solving it gives

$$v = 50(1 - e^{-0.1x}).$$

The limit at ∞ is 50 ft/sec or 34 mph. In your solution:

- Solve $1000v' = 5000 - 100v$, $v(0) = 0$.
- Take the limit, watch units.

P107
#27

Projectile problem

Show this step \rightarrow

The suggestion in the problem can be replaced by "multiply the DE by y' and apply the method of quadrature to variable $v = y'$."

The maximum height is found by setting $y' = 0$ (or $v = 0$). This is the equation

$$0 = R(R+y)v_0^2 - 2GM_y,$$

because a fraction $\frac{A}{B}$ is zero only in case $A=0$.

To solve for y is routine, but to evaluate you must locate values for R, G, M and use the given $v_0 = 1$ km/sec.

answer: 51.427 kilometers.

$$\begin{aligned} G &= 6.6726 \times 10^{-11} \\ M &= 5.975 \times 10^{24} \\ R &= 6.378 \times 10^6 \end{aligned}$$